

| <br>ALCALDÍA DE SANTIAGO DE CALI<br>SECRETARÍA DE EDUCACIÓN | <br><b>TALLER DE AREA</b> |         |                             | INSTITUCION EDUCATIVA<br>JUAN DE AMPUDIA<br> |
|----------------------------------------------------------------------------------------------------------------------------------------------|-----------------------------------------------------------------------------------------------------------|---------|-----------------------------|---------------------------------------------------------------------------------------------------------------------------------|
|                                                                                                                                              | CÓDIGO                                                                                                    | VERSIÓN | FECHA DE APROBACION         | PAGINA                                                                                                                          |
|                                                                                                                                              | FO-GA-007                                                                                                 | 02      | 09-02-2016                  | 1 DE 2                                                                                                                          |
| AREA                                                                                                                                         | FECHA                                                                                                     | GRADO   | DOCENTE                     |                                                                                                                                 |
| Matemática                                                                                                                                   | 08/03/2021                                                                                                | 1-1     | Carolina Latorre Echeverry. |                                                                                                                                 |

Desempeño: Identifica en el la relación de orden que número es mayor que, menor que o igual que

**Tema: Mayor qué, menor qué, igual qué (miércoles 10 de Marzo)**

**Guía de aprendizaje**

1. Cuenta y escribe: Mayor  $>$  o menor  $<$

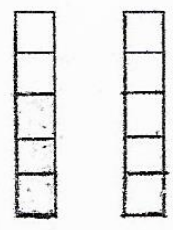
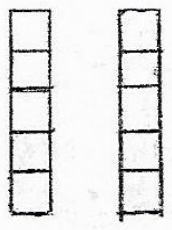

2. Escribe :  $>$   $<$  o  $=$

3. Recorta y pega el simbolo Mayor  $>$  , menor  $<$  o igual  $=$  donde corresponda

| <br>ALCALDÍA DE SANTIAGO DE CALI<br>SECRETARÍA DE EDUCACIÓN | <br><b>TALLER DE AREA</b> |         |                             | INSTITUCION EDUCATIVA<br>JUAN DE AMPUDIA<br> |
|----------------------------------------------------------------------------------------------------------------------------------------------|-----------------------------------------------------------------------------------------------------------|---------|-----------------------------|---------------------------------------------------------------------------------------------------------------------------------|
|                                                                                                                                              | CÓDIGO                                                                                                    | VERSIÓN | FECHA DE APROBACION         | PAGINA                                                                                                                          |
|                                                                                                                                              | FO-GA-007                                                                                                 | 02      | 09-02-2016                  | 2 DE 2                                                                                                                          |
| AREA                                                                                                                                         | FECHA                                                                                                     | GRADO   | DOCENTE                     |                                                                                                                                 |
| Matemática                                                                                                                                   | 08/03/2021                                                                                                | 1-1     | Carolina Latorre Echeverry. |                                                                                                                                 |

**Tema: Mayor qué, menor qué, igual qué (jueves 11 de Marzo)**

1. Colorea la cantidad de cuadros que indica cada número. Luego escribe Mayor  $>$ , menor  $<$

|                                                                                   |                                                                                   |                                                                                    |
|-----------------------------------------------------------------------------------|-----------------------------------------------------------------------------------|------------------------------------------------------------------------------------|
|  |  |  |
| 3 _____ 3                                                                         | 2 _____ 5                                                                         | 4 _____ 0                                                                          |



















2. Leamos lo que dice cada niño (a)



» Responde.

- ¿Cuál de los tres niños es mayor? \_\_\_\_\_
- ¿Cuál de los tres niños es menor? \_\_\_\_\_

3. Escribe: Mayor  $>$ , menor  $<$  o igual  $=$  donde corresponda

|                                                                                     |                                                                                     |                                                                                       |
|-------------------------------------------------------------------------------------|-------------------------------------------------------------------------------------|---------------------------------------------------------------------------------------|
|  |  |  |
|  |  |  |
|  |  |  |
|  |  |  |
|  |  |  |
|  |  |  |